

# ENGINEERING SCIENCE H1

## OUTCOME 1 - TUTORIAL 3

### BENDING MOMENTS

#### **EDEXCEL HNC/D ENGINEERING SCIENCE LEVEL 4 – H1 FORMERLY UNIT 21718P**

This material is duplicated in the Mechanical Principles module H2 and those studying the Mechanical Engineering course will find this a good introduction to that module.

You should judge your progress by completing the self assessment exercises.

*These may be sent for marking or you may request copies of the solutions at a cost (see home page).*

On completion of this tutorial you should be able to do the following.

- Define and calculate BENDING MOMENT in a beam.
- Draw basic BENDING MOMENT Diagrams.
- Draw shear and bending moment diagrams.
- Determine where the maximum bending moment in a beam.

*You may have already covered this material at national level in which case you may skip to the next tutorial. It is assumed that students doing this tutorial already understand the basic principles of moments, shear force and how to calculate the reaction forces for simply supported beams. This information is contained in the preliminary level tutorials.*

# BENDING MOMENTS FOR POINT LOADED BEAMS

## 1 DEFINITION

The bending moment acting at a point on a beam is the resultant turning moment due to all the forces acting to one side of the point.

Normally we draw the beam horizontally with the usual conventions of up being positive (y) and left to right being positive (x). On figure 19, the point considered is x metres from the left end. It is usual to only consider the forces to the left of the point. If the forces act up then they will produce a clockwise turning moment and bend the beam up on the left. This is called SAGGING and the bending moment is positive. If the force on the left is down, the moment produced about the point is anti-clockwise and the beam is bent down. This is called HOGGING and the bending moment is negative.

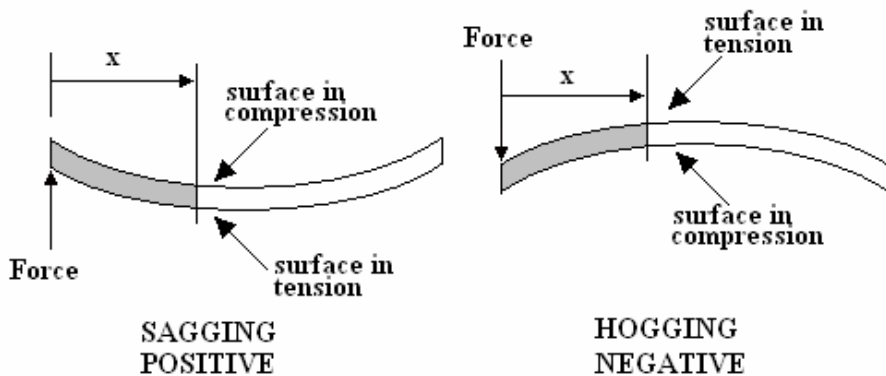


Figure 1

The reason for using the names sagging and hogging is that you might decide to consider the forces to the right of the point instead of the left. The numerical value of the bending moment will be the same but in this case the anti-clockwise moment produces sagging and the clockwise moment produces hogging. In any analysis, you must decide if the moment is sagging or hogging.

**Bending stress is covered in tutorial 1. A sagging moment produces tensile stress on the bottom and compressive stress on the top. A hogging moment produces tension on the top and compression on the bottom.**

Consider the simply supported beam in figure 2. If the beam was cut as shown, in order to keep the left section in place, not only would a vertical force have to be applied (the shear force) to stop it moving up, but an anti-clockwise moment  $M$  would have to be applied to stop it rotating. This moment must have been previously exerted by the material and accounts for the bending stress in the material.

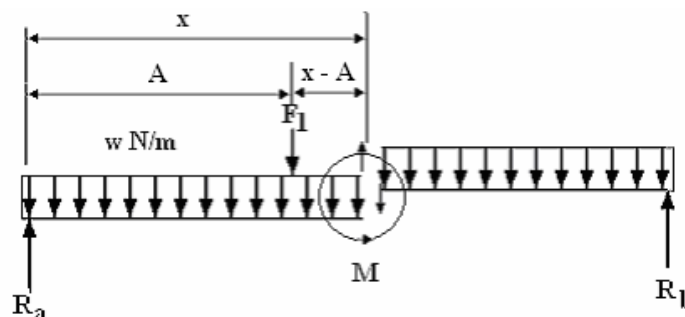


Figure 2

For equilibrium the total moment must be zero at the point considered (and for any other point on the beam).

Only consider forces to the left of the point. List all the turning moments due to the forces to the left of the point. The reaction  $R_a$  produces a moment of  $R_a x$  and this is sagging so the bending moment at the section is plus.

- The force  $F_1$  produces a moment of  $F_1 (x-A)$  and this is hogging so it is minus.
- Sum the moments and we get  $M = R_a x - F_1 (x-A)$

We would get the same result if we summed the moments due to all the forces on the right. It is worth noting that the bending moment must be zero at a free end. In the case discussed, the bending moment diagram is like this.

## 2 BENDING MOMENT DIAGRAM

A Bending Moment diagram is simply a graph of bending moment plotted vertically against distance  $x$  from the left end. It involves working out the bending moment at strategic points along the beam. This is best demonstrated with a series of worked examples.

### WORKED EXAMPLE No.1

Draw the shear bending moment diagram for the simply supported beam shown and determine the maximum shear force.

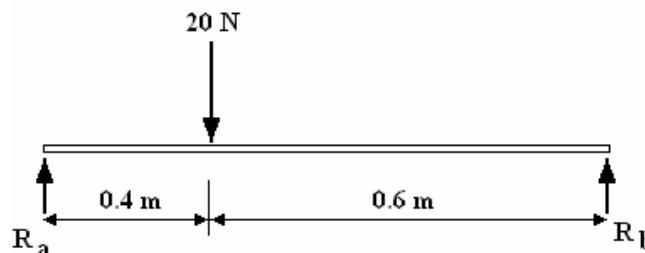


Figure 3

### SOLUTION

First calculate the reaction forces by balancing the moments about the left end.

$$R_b \times 1.0 = 20 \times 0.4 \quad R_b = 8 \text{ N}$$

Repeat the process about the right end.

$$R_a \times 1.0 = 20 \times 0.6 \quad R_a = 12 \text{ N}$$

Check  $R_a + R_b = 20 \text{ N}$  so the upwards and downwards forces are the same.

Now consider a point to the right of the point load.

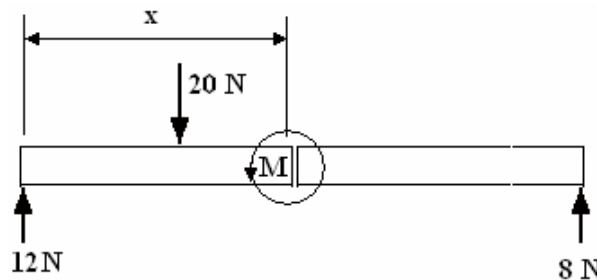


Figure 4

Take moments of forces about this point and noting that upwards forces produce positive moments and downwards negative we get:

$$M = 12x - 20(x - 0.4)$$

By this process, the bending moment may be solved for any point  $x$  along a beam. A graph of  $M$  plotted against  $x$  is called a **BENDING MOMENT DIAGRAM**.

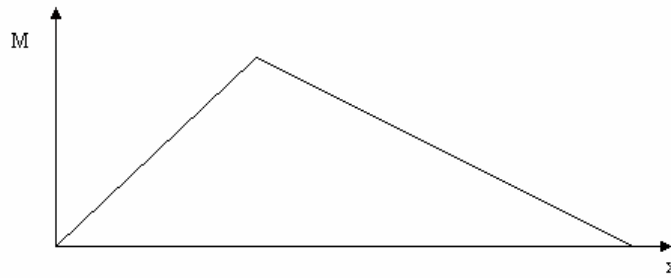


Figure 5

It is worth noting that the bending moment must be zero at a free end. In the case discussed, the bending moment diagram is like this.

### **WORKED EXAMPLE No.2**

Consider an example with a point load and a uniform load.

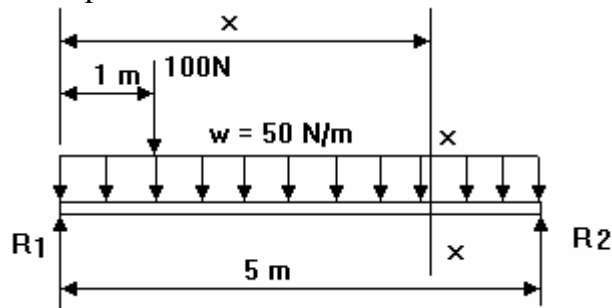


Figure 6

### **SOLUTION**

First it is necessary to calculate the reactions  $R_1$  and  $R_2$ .

$$\text{Total downwards load} = (50)(5) + 100 = 350 \text{ N.}$$

$$\text{Moments about left end. } (R_2)(5) = (50)(5)(5/2) + (100)(1)$$

$$R_2 = 145 \text{ N} \quad R_1 = 350 - 145 = 205 \text{ N}$$

Let's now work out the bending moments at key positions for the same example.

$$x=0 \quad M=0$$

$$x=0.5 \quad M=(205)(0.5) - (50)(0.5)^2/2 = 96.25 \text{ Nm}$$

$$x=1 \quad M=(205)(1) - (50)(1)^2/2 = 180 \text{ Nm}$$

$$x=2 \quad M=(205)(2) - (50)(2)^2/2 - (100)(1) = 210 \text{ Nm}$$

$$x=3 \quad M=(205)(3) - (50)(3)^2/2 - (100)(2) = 190 \text{ Nm}$$

$$x=4 \quad M=(205)(4) - (50)(4)^2/2 - (100)(3) = 120 \text{ Nm}$$

$$x=5 \quad M=(205)(5) - (50)(5)^2/2 - (100)(4) = 0 \text{ Nm}$$

Note that the bending moments at the free ends of a simply supported beam must be zero since there are no loads to the one side of that point. If the last figure had not come out to zero, then the calculations would have to be checked thoroughly. In this example the bending moment is always positive since the beam sags along its entire length.

The graph is like this.

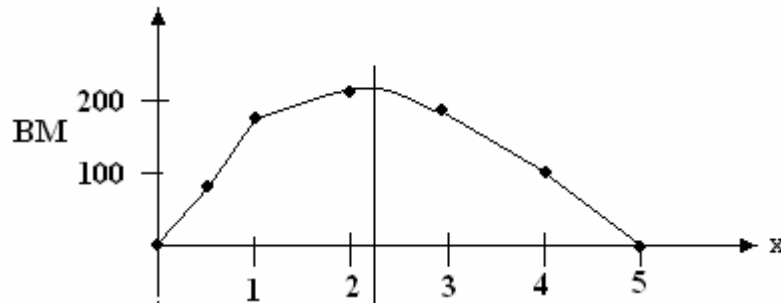


Figure 7

Note that the maximum bending moment occurs at about  $x = 2$  m. To determine this precisely would require more points to be plotted or the use of max and min theory in conjunction with the equation. This is not expected of you but later on we will see how this precise point may be located from the shear force diagrams.

Beam problems usually involve finding the stress due to the bending moment. Bending stress is covered in tutorial 1. The next problem brings in the stress equation.

**WORKED EXAMPLE No.3**

A simply supported beam is loaded as shown in the diagram. The beam has a rectangular section 50 mm wide and 100 mm deep. Determine the maximum bending stress on it.

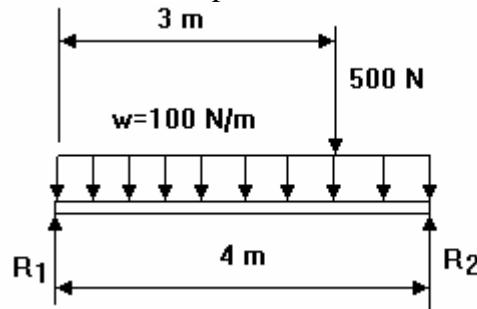


Figure 8

**SOLUTION**

First we must find the maximum bending moment by drawing a bending moment diagram.

MOMENTS ABOUT LEFT END.  $(R_2)(4) = (500)(3) + (100)(4)2/2 = 575N$

VERTICAL BALANCE  $R_1 + R_2 = 500 + (100)(4) = 900$

$R_1 = 900 - 575 = 325 N$

Next evaluate the bending moments at 1 m intervals.

x (m)	0	1	2	3	3.5	4
M (Nm)	0	275	450	525	275	0

The bending moment diagram is like this

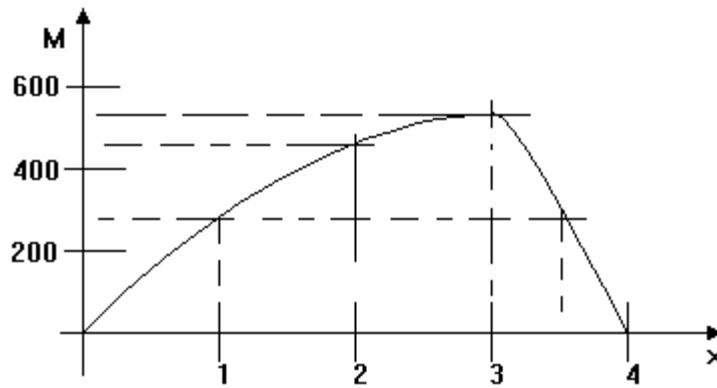


Figure 9

The maximum bending moment is 525 Nm at 3 m from the left end.

The bending stress is given by the formula  $\sigma = My/I$

The beam dimensions are  $B = 50 \text{ mm}$   $D = 100 \text{ mm}$  Remember to work in metres.

Calculate the second moment of area  $I = BD^3/12 = 4.167 \times 10^{-6} \text{ m}^4$

The maximum value of  $y$  is the distance from the middle to the top  $y = D/2 = 0.05 \text{ m}$

$$\sigma = My/I = 525 \times 0.05 / 4.167 \times 10^{-6}$$

$$\sigma = 6.3 \times 10^6 \text{ Pa}$$

$$\sigma = 6.3 \text{ MPa}$$

### SELF ASSESSMENT EXERCISE No.1

1. A beam is loaded as shown below. Calculate the reactions and draw the Bending Moment diagram. Determine the maximum bending moment. **(Answers 310 N, 210 N and 275 Mm)**

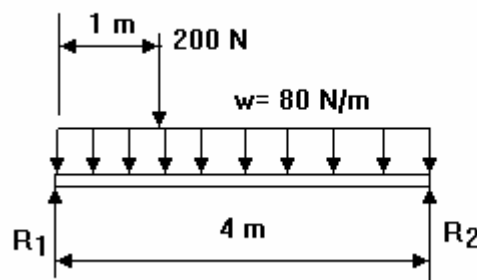


Figure 10

2. A beam is loaded as shown below. Calculate the reactions and draw the bending moment diagram. Determine the greatest ending moment. **(Answers 600 N, 600 N and 1188 Nm)**

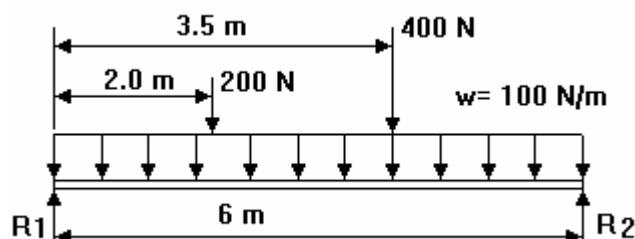


Figure 11

### 3 DETERMINING THE POSITION OF GREATEST BENDING MOMENT.

The following work might be more than that required for the syllabus but students seeking good grades should complete it.

It can be shown that where ever the shear force changes from positive to negative, the bending moment is a maximum and where it changes from negative to positive the bending moment is a minimum. This means that anywhere on the SF diagram where the value goes through zero, the bending moment reaches a peak. This is illustrated by combining worked example 3 and worked example 9 which contains the solutions for the same beam. The combined diagrams should be drawn as shown. Note that the maximum bending moment occurs just over 2 metres from the end at the point where the SF diagram passes through zero.

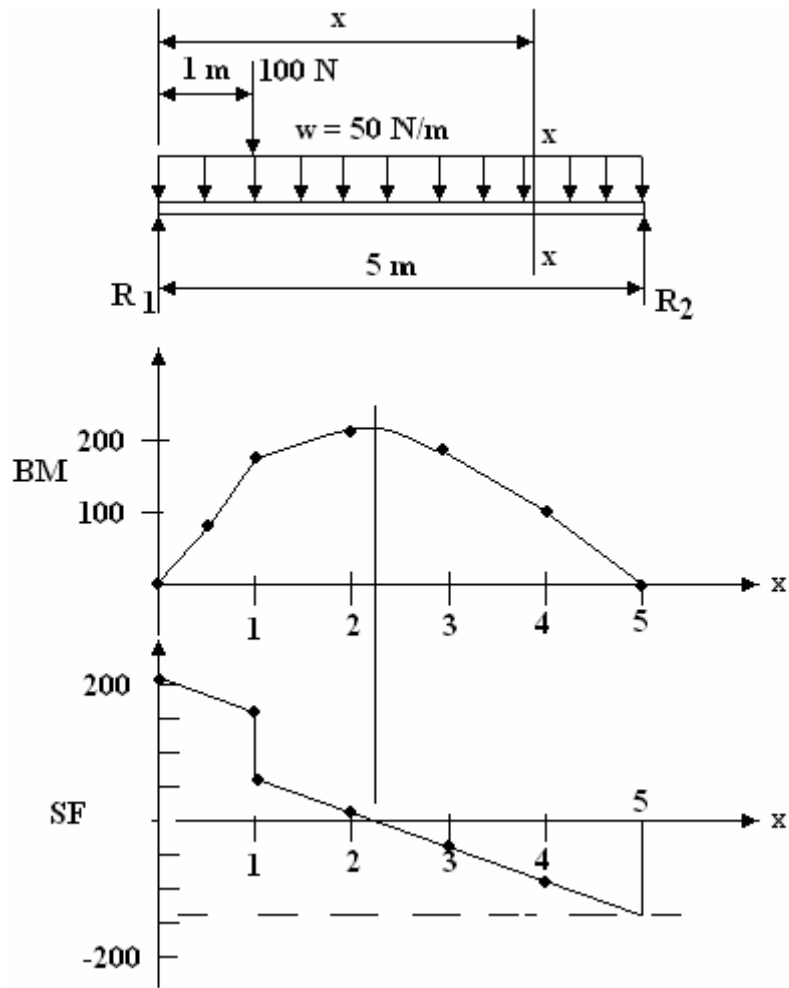


Figure 12

On more complex beams, the SF diagram might pass through the zero value at several points resulting in several maximum and/or minimum points on the BM diagram. The bending moment that produces maximum stress could be the greatest positive value or the greatest negative value

### WORKED EXAMPLE No.4

A simply supported beam is loaded as shown in the diagram. Draw the bending moment diagram.

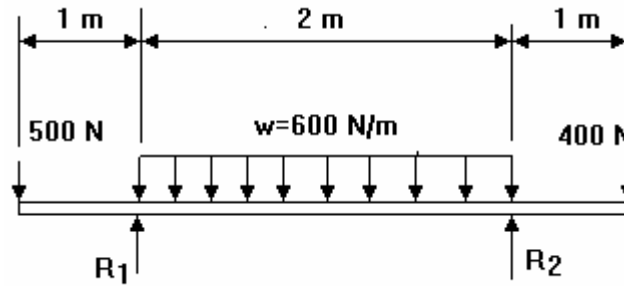


Figure No.13

### SOLUTION

First we must find the reactions. The u.d.l. only covers the centre portion. The total load due to the u.d.l. is  $600 \times 2 = 1200$  N and this acts at the centre. We may now take moments. For a change, let's take moments about  $R_2$

$$(R_1)(2) + (400)(1) = (1200)(1) + (500)(3) \quad R_1 = 1150 \text{ N}$$

$$\text{VERTICAL BALANCE } R_1 + R_2 = 500 + 1200 + 400 = 2100 \text{ N}$$

$$R_2 = 2100 - 1150 = 950 \text{ N}$$

$x = 0$   $F =$  goes from 0 to -500 instantly.

$x = 1$   $F =$  changes from -500 to  $(-500 + 1150) = +650$

$x = 2$   $F = 650 - 600 = +50$

$x = 3$   $F = 50 - 600 = -550$  then changes to  $-550 + 950 = +400$

$x = 4$   $F =$  changes from 400 to 0 instantly.

Drawing the shear force diagram shows that it passes through zero at  $x = 1$  m and  $x = 3$  m. Both these points will give a maximum or minimum value of the bending moment. If we only want these values there is no need to draw the bending moment diagram but the whole thing is shown here for interest.

**BENDING MOMENTS.** Remember that we only calculate moments of the forces to the left of the point considered and  $x$  is measured from the extreme left end.

$$x=0 \quad M=0$$

$$x=1 \quad M = -(500)(1) = -500 \text{ Nm}$$

$$x=1.5 \quad M = -(500)(1.5) + (1150)(1) - (600)(0.5)^2/2 = -250 \text{ Nm}$$

$$x=2 \quad M = -(500)(2) + (1150)(1) - (600)(1)^2/2 = -150 \text{ Nm}$$

$$x=2.5 \quad M = -(500)(2.5) + (1150)(1.5) - (600)(1.5)^2/2 = -200 \text{ Nm}$$

$$x=3 \quad M = -(500)(3) + (1150)(2) - (600)(2)^2/2 = -400 \text{ Nm}$$

$$x=4 \quad M = -(500)(4) + (1150)(3) - (600)(2)(2) + (950)(1) = 0$$

Note that in the last calculation, the u.d.l. did not go up to the point  $x = 4$  and that the moment due to it is the total force  $(600 \text{ N/m})(2 \text{ m})$  times the distance to the middle (2m).



The complete diagram reveals that the bending moment is always negative (hogging) so tensile stress would occur on the top layer of the beam. This stress will be a maximum at  $x = 1$  when the bending moment has a value of  $-500 \text{ Nm}$ . The minus sign has no bearing on the stress value and serves to tell us that it is a hogging moment.

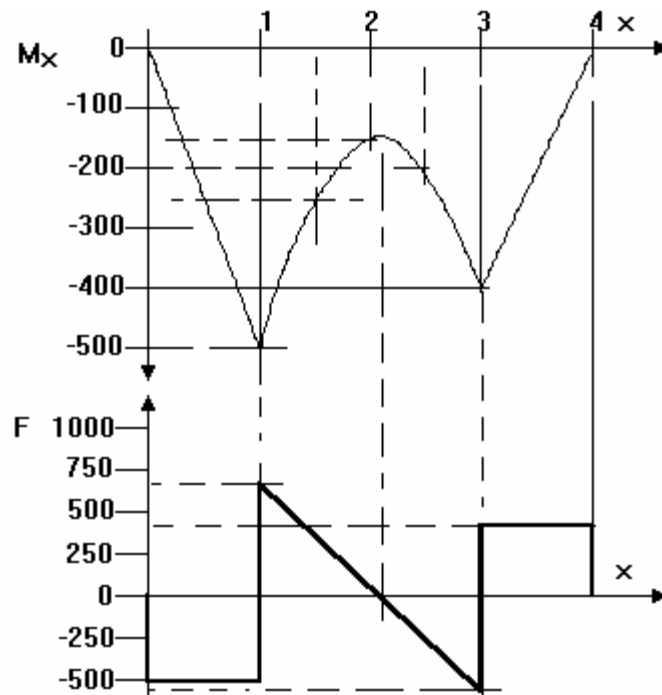


Figure 14

The greatest negative bending moment is  $-500 \text{ Nm}$  at  $1 \text{ m}$  from the left end. Note that the sign has no significance when it comes to working out bending stresses other than to indicate that it is hogging and will be tensile on the top layer and compressive on the bottom layer.

### SELF ASSESSMENT EXERCISE No.2

1. A beam is loaded as shown below. The beam has a second moment of area about its centroid of  $5 \times 10^{-6} \text{ m}^4$  and the distance to the edge from the centroid is 50 mm. Draw the bending moment diagram and determine

i) The maximum bending moment. **(Answer 275 Nm)**

ii) The maximum bending stress. **(Answer 2.75 MPa)**

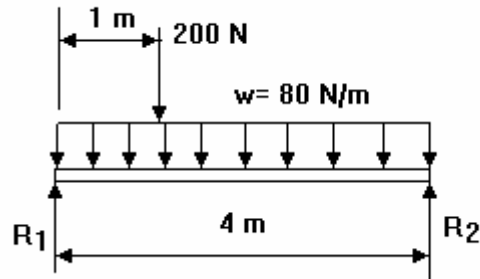


Figure 15

2. A beam is loaded as shown below. The beam has a second moment of area about its centroid of  $12 \times 10^{-6} \text{ m}^4$  and the distance to the edge from the centroid is 70 mm. Draw the bending moment diagram and determine

i) The maximum bending moment. (1187.5 Nm)

ii) The maximum bending stress. (6.927 MPa)

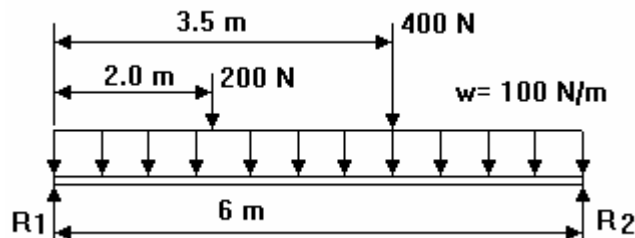


Figure 16

3. A light alloy tube of 10 cm outer diameter and 7.5 cm inner diameter rests horizontally on simple supports 4 m apart. A concentrated load of 500 N is applied to the tube midway between the supports.

Sketch diagrams of shear force and bending moments due to the applied load.

Determine the maximum bending moment and the corresponding maximum stress.

**(Answers 500 Nm and 7.45 MPa)**

4. Part of a test rig consists of a 15 m long elastic beam which is simply supported at one end and rests on a frictionless roller located 5 m from the other end, as shown in fig. 41. The beam has a uniformly distributed load of 150 N/m due to its own weight and is subjected to concentrated loads of 1000 N and 400 N as shown.
- (i) Calculate the reactions. **(Answers 962.5 N and 2687.5 N)**
- (ii) Sketch the shear force and bending moment diagrams and determine the magnitude and location of the maximum values of the shear force and bending moment.  
**(Answers SF 1537.5 N 10 m from left end, BM 2 937.5 Nm 5 m from left end).**
- (ii) Determine the maximum bending stress in the beam if the section is that shown in fig.41 and with bending about the neutral axis x-x. **(Answer 55.13 MPa)**

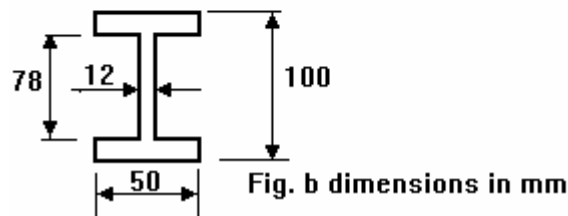
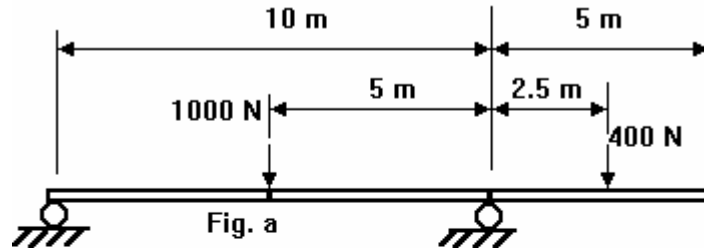


Figure 17

5. A horizontal beam 4.2 m long, resting on two simple supports 3.0 m apart, carries a uniformly distributed load of 25 kN/m between the supports with concentrated loads of 15 kN and 20 kN at the ends, as shown in fig. 42.

Assuming the weight of the beam is negligible determine the reactions  $R_1$  and  $R_2$  at the supports. **(Answers 51.5 kN and 58.5 N)**

Sketch diagrams of shear force and bending moments and indicate the point of maximum bending moment.

State the greatest bending moment and shear force. **(Answers -38.5 kN and 18 kNm)**

The beam has a uniform rectangular cross-section, the depth being equal to 1.5 times the width. Determine the size of the section required to limit the maximum bending stress to  $375 \text{ MN/m}^2$ .  
**(Answers 50 mm wide and 75.6 mm deep)**

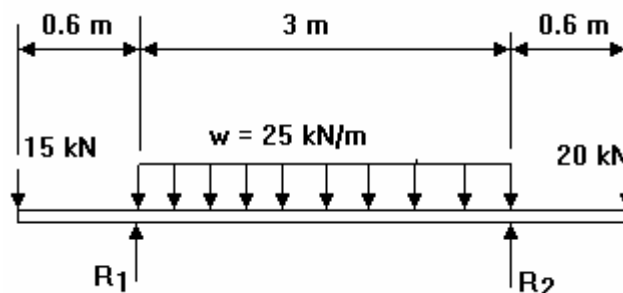


Figure 18